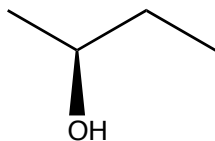


Quiz 1 (Monday Morning)

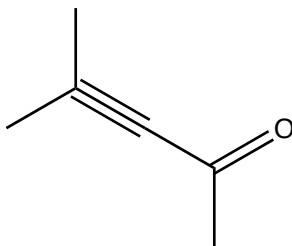
Name:

Recitation Instructor

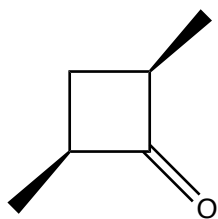
1. Give the IUPAC name of the following molecule (2 points). _____



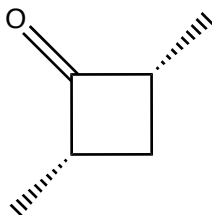
2. What is wrong with the following molecule (2 points).



3. What is the relationship between the following molecules? (3 points)
Diastereomers, Enantiomers or Identical.



vs.



4. Is the following alkene *E* or *Z*? Show work for credit (3 points)

